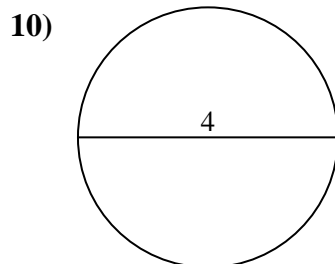
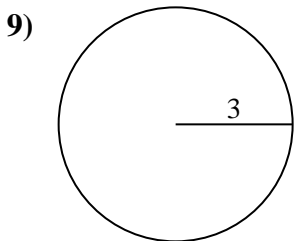
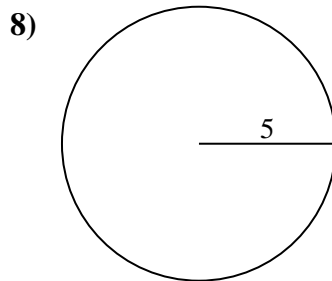
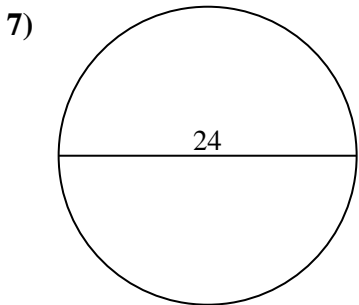
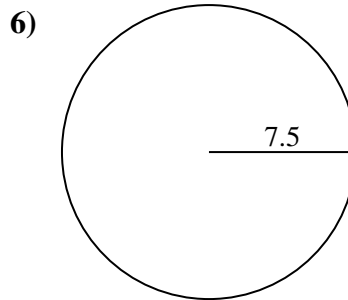
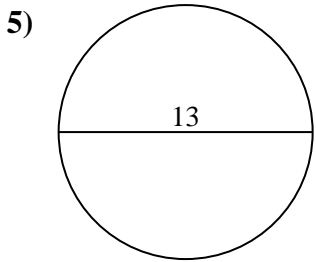
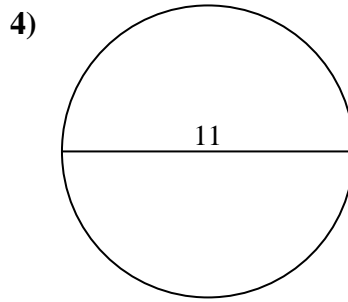
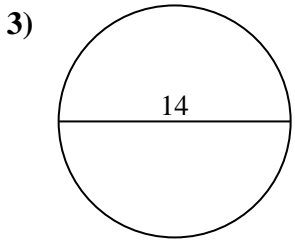
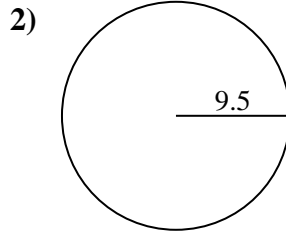
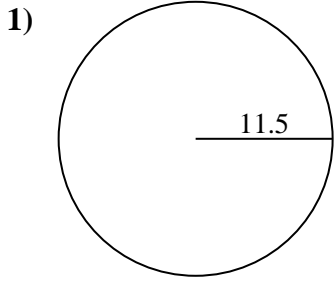




Find the area and circumference of each circle. Circles are not to scale.



Answers

1a. _____

1c. _____

2a. _____

2c. _____

3a. _____

3c. _____

4a. _____

4c. _____

5a. _____

5c. _____

6a. _____

6c. _____

7a. _____

7c. _____

8a. _____

8c. _____

9a. _____

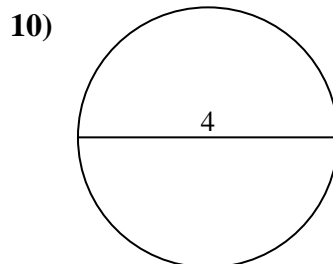
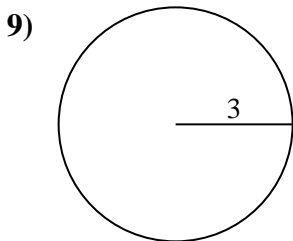
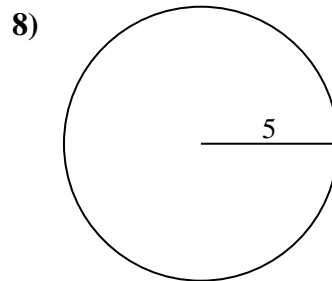
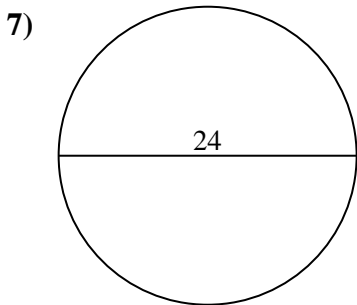
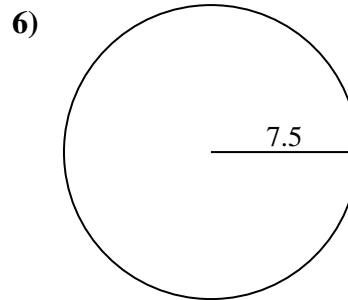
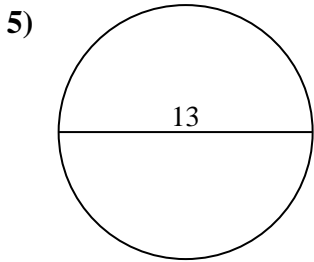
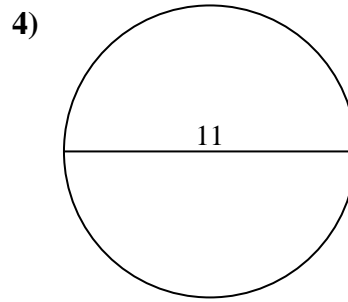
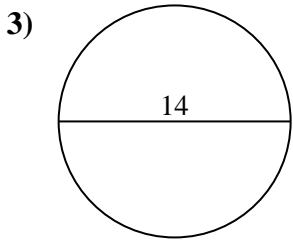
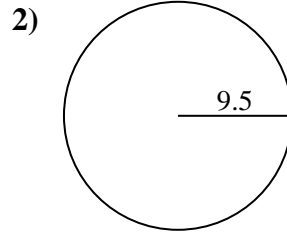
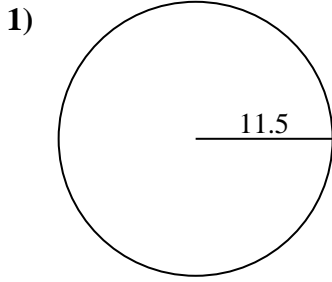
9c. _____

10a. _____

10c. _____



Find the area and circumference of each circle. Circles are not to scale.



Answers

1a. 415.48 cm²

1c. 72.26 cm

2a. 283.53 cm²

2c. 59.69 cm

3a. 153.94 cm²

3c. 43.98 cm

4a. 95.03 cm²

4c. 34.56 cm

5a. 132.73 cm²

5c. 40.84 cm

6a. 176.71 cm²

6c. 47.12 cm

7a. 452.39 cm²

7c. 75.4 cm

8a. 78.54 cm²

8c. 31.42 cm

9a. 28.27 cm²

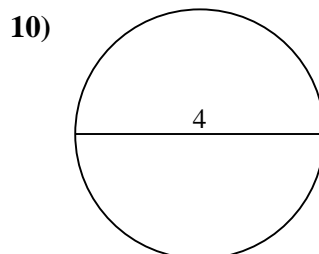
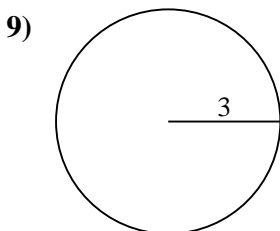
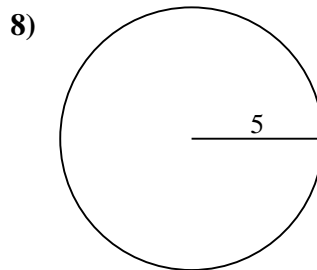
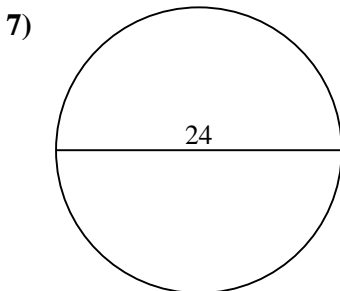
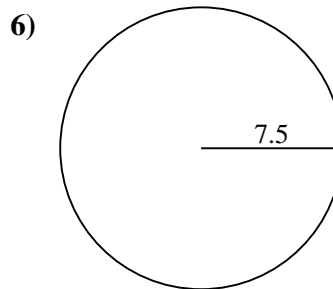
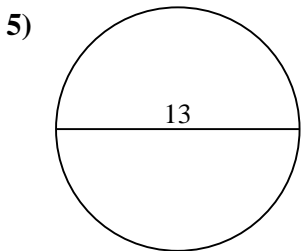
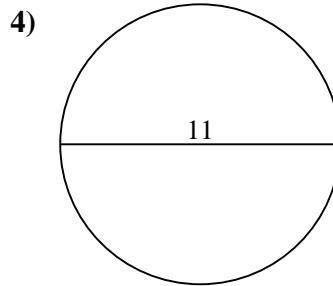
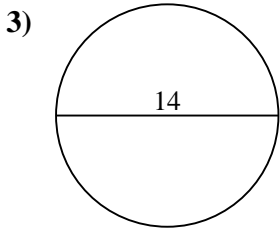
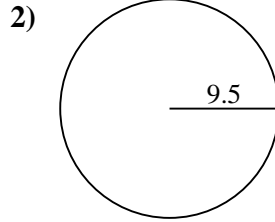
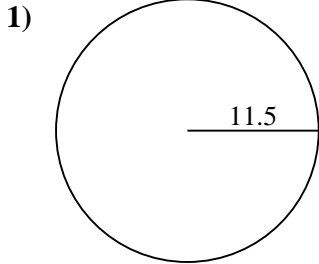
9c. 18.85 cm

10a. 12.57 cm²

10c. 12.57 cm



Find the area and circumference of each circle. Circles are not to scale.



Answers

1a. _____

1c. _____

2a. _____

2c. _____

3a. _____

3c. _____

4a. _____

4c. _____

5a. _____

5c. _____

6a. _____

6c. _____

7a. _____

7c. _____

8a. _____

8c. _____

9a. _____

9c. _____

10a. _____

10c. _____